




WB: 11th October 2021

L.C: Count, read and write numbers to 50 in numerals; count in multiples of twos, fives and tens.

Hook...
Match the number the correct representation

	10
	30
	20

$$\begin{array}{|c|} \hline \text{Rod of 10} \\ \hline \end{array} + \begin{array}{|c|} \hline \text{Rod of 10} \\ \hline \end{array} + \begin{array}{|c|} \hline \text{Rod of 10} \\ \hline \end{array} = \boxed{}$$

$$\begin{array}{|c|} \hline \text{Rod of 5} \\ \hline \end{array} + \begin{array}{|c|} \hline \text{Rod of 5} \\ \hline \end{array} + \begin{array}{|c|} \hline \text{Rod of 5} \\ \hline \end{array} + \begin{array}{|c|} \hline \text{Rod of 5} \\ \hline \end{array} = \boxed{}$$

$$\begin{array}{|c|} \hline \text{Rod of 5} \\ \hline \end{array} \begin{array}{|c|} \hline \text{Rod of 5} \\ \hline \end{array} \begin{array}{|c|} \hline \text{Rod of 5} \\ \hline \end{array} \begin{array}{|c|} \hline \text{Rod of 5} \\ \hline \end{array} \begin{array}{|c|} \hline \text{Rod of 5} \\ \hline \end{array} = \boxed{}$$



What is the total amount in the purse?

